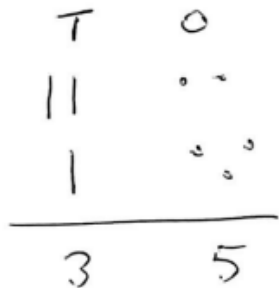
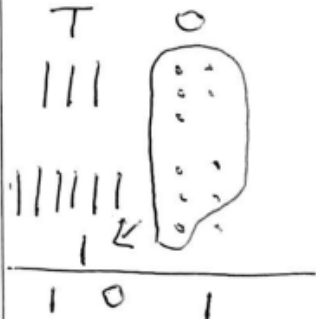
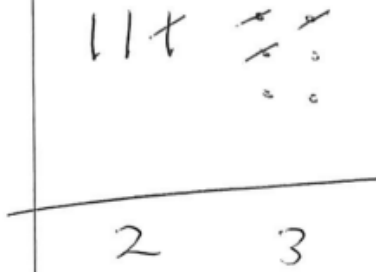



# Year 2 Maths Homework, 21.11.25 (Conf)

**You can use a mental or written method to answer the questions**

Methods for calculations

addition		subtraction	
$22 + 13 = 35$ 	$35 + 66 = 101$ 	$36 - 13 =$ 	$32 - 19 =$  change a ten into 10 ones
$4 + 10 + 6 =$ look for the number bond to make ten first (4 + 6)		$100 - 98 =$ numbers are close together so count up from 98 to find the difference	


**1.  $32 + 34 =$**

**2.  $64 - 22 =$**

**Careful you need to  
exchange:**

**3.  $73 - 24 =$**


If you spot 36 butterflies in your garden and 11 more join them, how many butterflies would there be altogether?



**4.**

**Use this space for your working out:**

If you have 49 pieces of chocolate and give 24 pieces away, how many pieces of chocolate do you have left?



**5.**

**Use this space for your working out:**