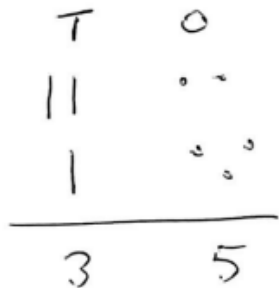
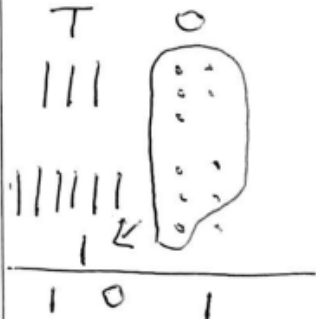
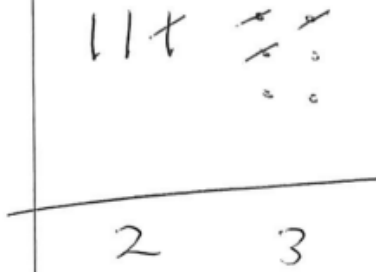



Year 2 Maths Homework, 21.11.25 (V confident)


You can use a mental or written method to answer the questions

Methods for calculations

addition		subtraction	
$22 + 13 = 35$ 	$35 + 66 = 101$ 	$36 - 13 =$ 	$32 - 19 =$  change a ten into 10 ones
$4 + 10 + 6 =$ look for the number bond to make ten first (4 + 6)		$100 - 98 =$ numbers are close together so count up from 98 to find the difference	

1.


If you have 49 pieces of chocolate and give 24 pieces away, how many pieces of chocolate do you have left?



Use this space for your working out:

2.

If you count 62 sheep in a field and 24 cows, how many animals are there altogether?



Use this space for your working out:

3.

. If you make 43 cupcakes for a party and eat 14 of them, how many cupcakes are left?



Use this space for your working out:

4.

If you have 68 people on the bus and 26 get off, how many people are left?



Use this space for your working out: